

Lernaufgaben Mathematik 11.01.2021 bis 15.01.2021

Thema: Addition / Subtraktion und Kreis

Dienstag	Mittwoch	Donnerstag	Freitag
Kreis	Addition/Subtraktion	Addition/Subtraktion	Addition/Subtraktion
Bu S. 106/6,7 Arbeitsblatt 3	Bu S. 40/5 Bu S. 55/7,11 Bu S.42/2	Bu S. 40/ Wiederhole Bu S. 55/9,10 Bu S. 42/4	Bu S. 42/Wiederhole Bu S. 44/5 Bu S. 42/4
ZA: Bu S. 54/2	ZA: Bu S.42/7 Arbeitsblatt 1	ZA: Bu S. 43/5	ZA Arbeitsblatt 2

Liebe Schüler der Klasse 3,

wenn ihr eine Frage habt oder Hilfe braucht, könnt ihr mich mit Erlaubnis eurer Eltern jeden Tag telefonisch bis 14 Uhr in der Schule erreichen.

Liebe Grüße
Frau Fuchs



Addiere halbschriftlich:

5	6	4	+	4	9	=	6	1	3
5	6	4	+	4	0	=	6	0	4
6	0	4	+		9	=	6	1	3

4	2	2	+	5	7	=			
			+			=			
			+			=			

8	2	4	+	3	8	=			
			+			=			
			+			=			

1	8	9	+	4	1	=			
			+			=			
			+			=			

9	3	4	+	4	4	=			
			+			=			
			+			=			

6	2	1	+	9	3	=			
			+			=			
			+			=			

4	6	2	+	7	4	=			
			+			=			
			+			=			


5	3	2	+	6	5	=			
			+			=			
			+			=			

8	5	3	+	3	6	=			
			+			=			
			+			=			

7	1	5	+	4	8	=			
			+			=			
			+			=			

3	1	5	+	8	6	=			
			+			=			
			+			=			

9	4	6	+	7	7	=			
			+			=			
			+			=			

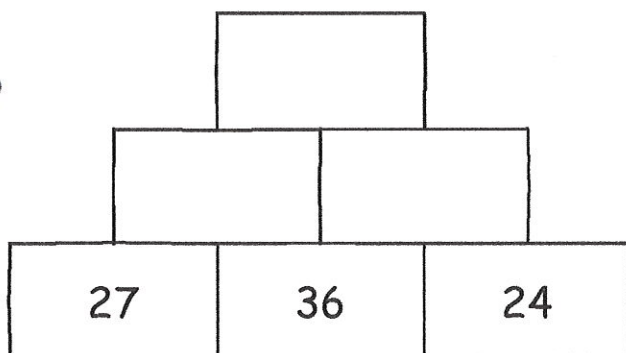
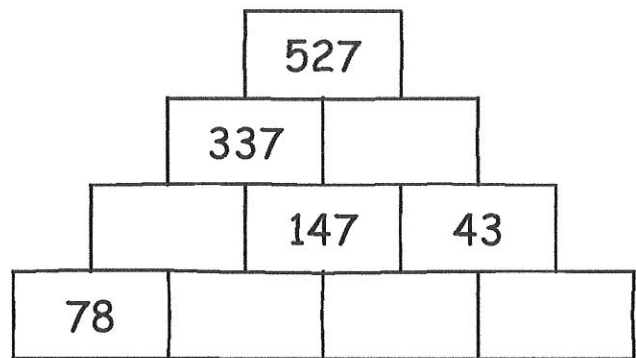
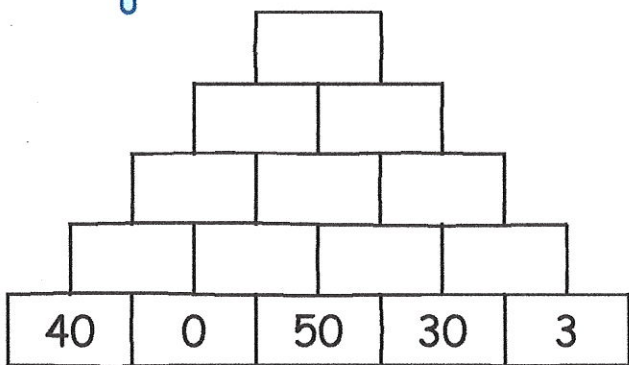
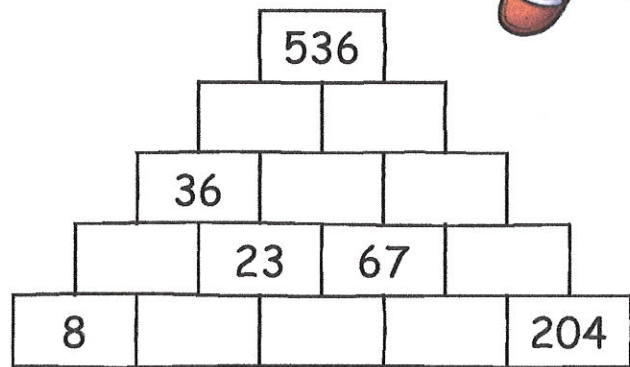
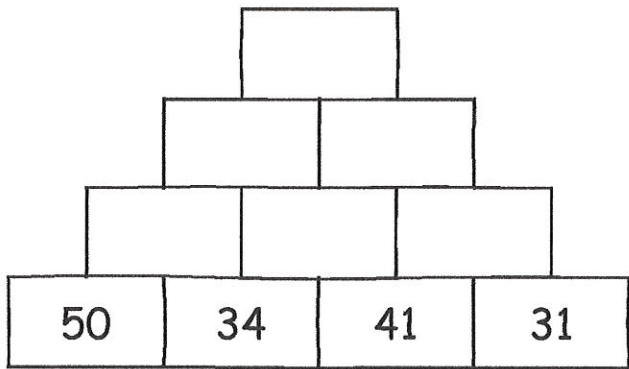


Name: _____

Datum: _____

AB2
leichter

Addition bis 1000 - Bist du fit?

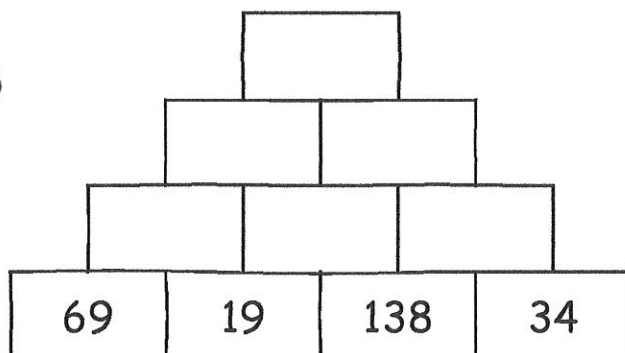
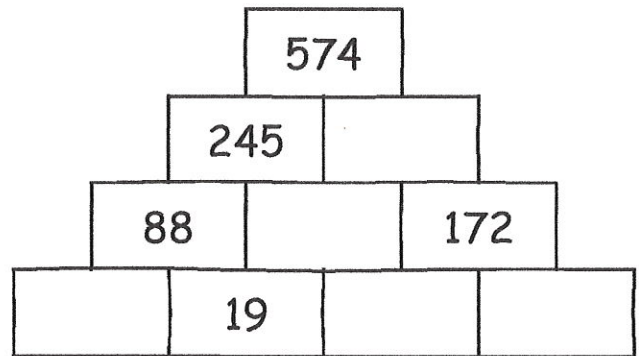
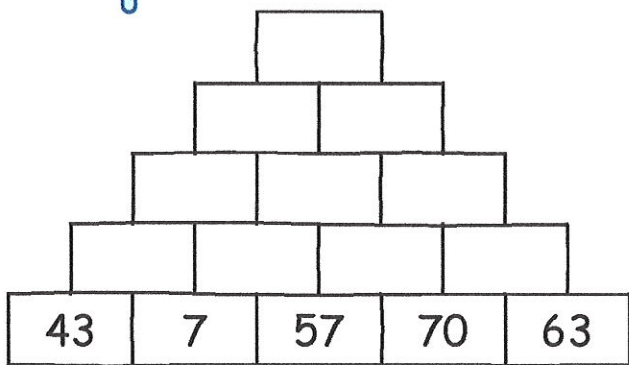
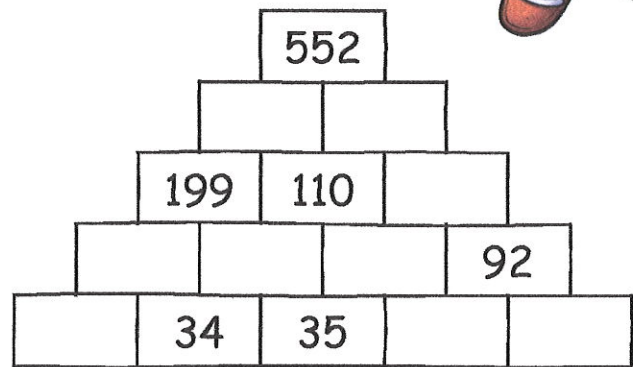
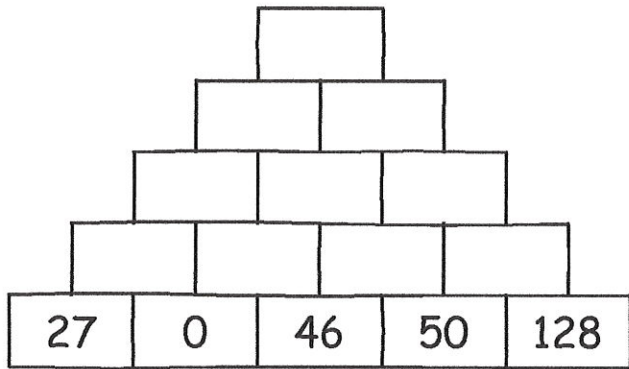


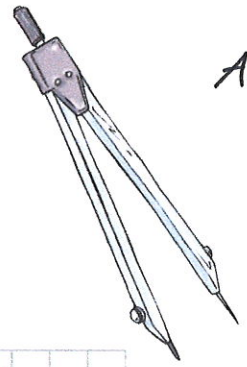
Name: _____

Datum: _____

AB 2
Schwierig

Addition bis 1000 - Bist du fit?





Name: _____

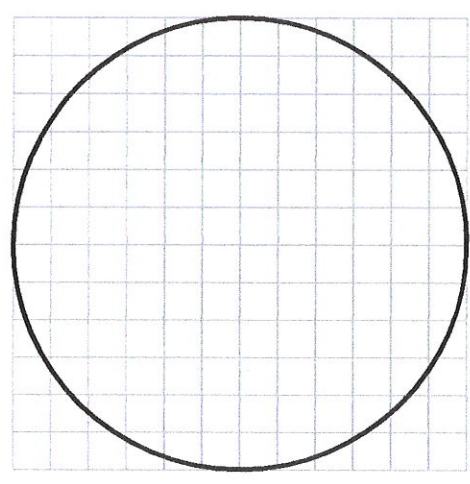
Datum: _____

Übung mit dem Zirkel

①

Zeichne die folgenden Dinge richtig ein.

- Radius: rot
- Durchmesser: blau
- Mittelpunkt: x



②

Zeichne die Kreise ein.

M $r = 3$ cm

M $r = 24$ mm

M $d = 7,2$ cm

x M

x M

x M

③

Zeichne die Figur nach.

